

## 2D SHAPES

KS1 – 2001 Paper

1.

II Draw arrows to show which shapes belong in the set.

has 5 corners

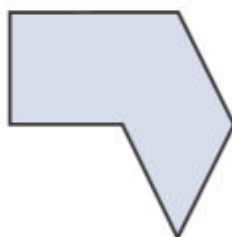
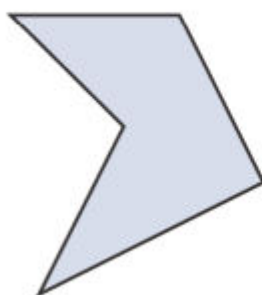
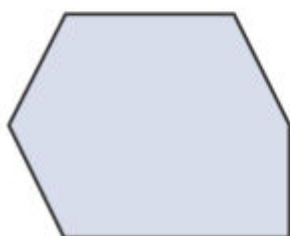
The diagram shows a central circle. Surrounding it are seven shapes: an octagon, a square with a triangular notch on its left side, a triangle, a pentagon, a diamond, a rectangle with a triangular point on its right side, and a circle. A speech bubble above the central circle contains the text 'has 5 corners' and has an arrow pointing to the central circle. Another arrow points from the square with the notch to the central circle.

KS1 – 2003 Paper 1

2.


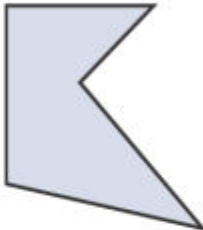
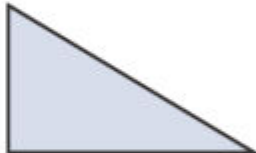

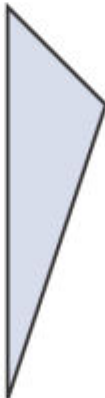

26 Two of these shapes are **not** hexagons.

Draw a cross (x) on each shape which is **not** a hexagon.



**One** shape is in the wrong place on this sorting diagram.

Draw a cross (x) on it.

	is a triangle	is <b>not</b> a triangle
has a right angle		 
does <b>not</b> have a right angle	 	



4.

23 Sita had a square.



She cut a triangle of this size off **each** corner.



What is the name of the shape that is left?

Tick (✓) it.

square

pentagon

hexagon

heptagon

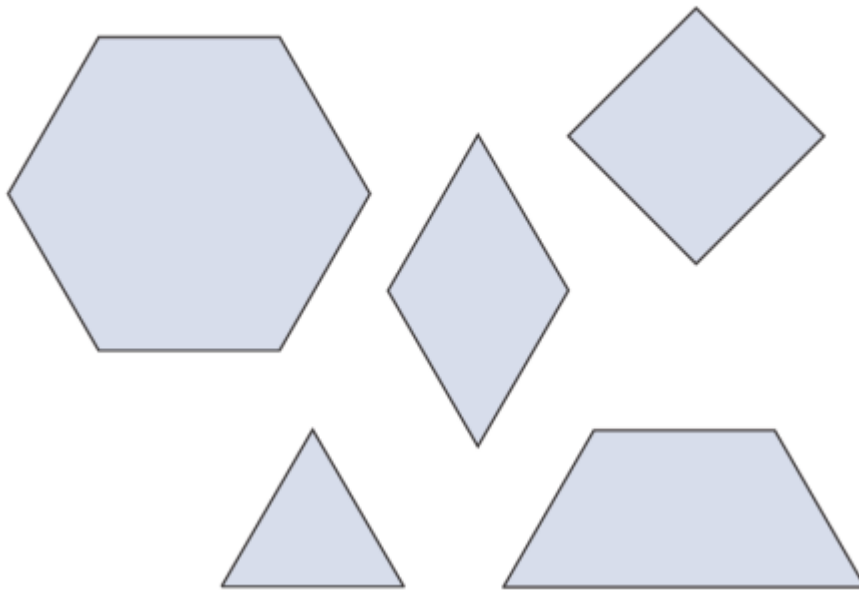
octagon

KS1 – 2004 Paper 1

5.

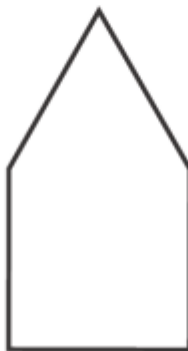


Desi has some shapes.

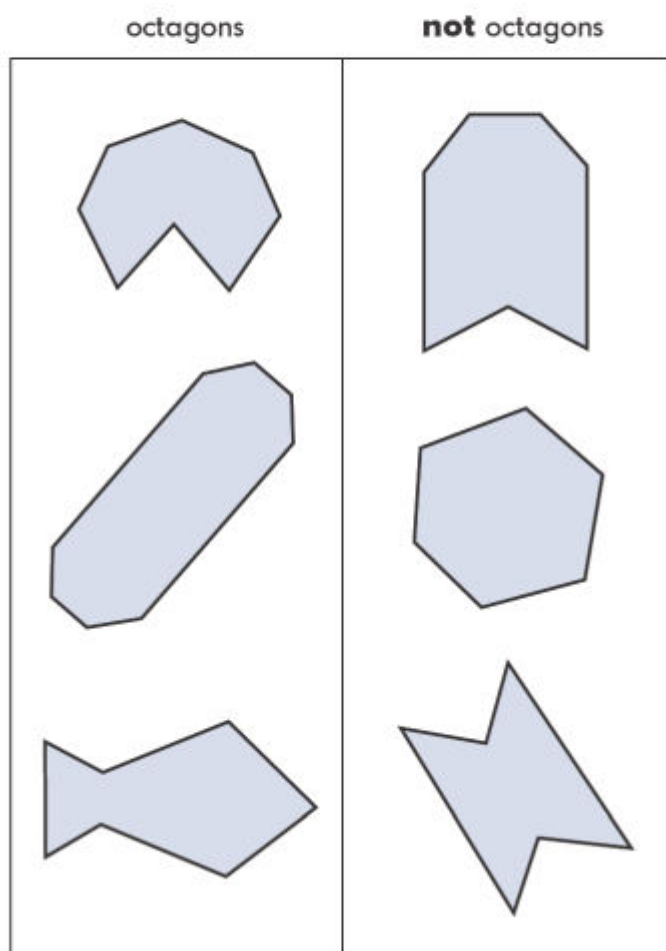


He fits **two** of the shapes together to make the shape below.

Draw a tick (✓) on the two shapes.



- 23 These shapes have been sorted.  
One shape is in the wrong place.  
Draw a cross (x) on it.

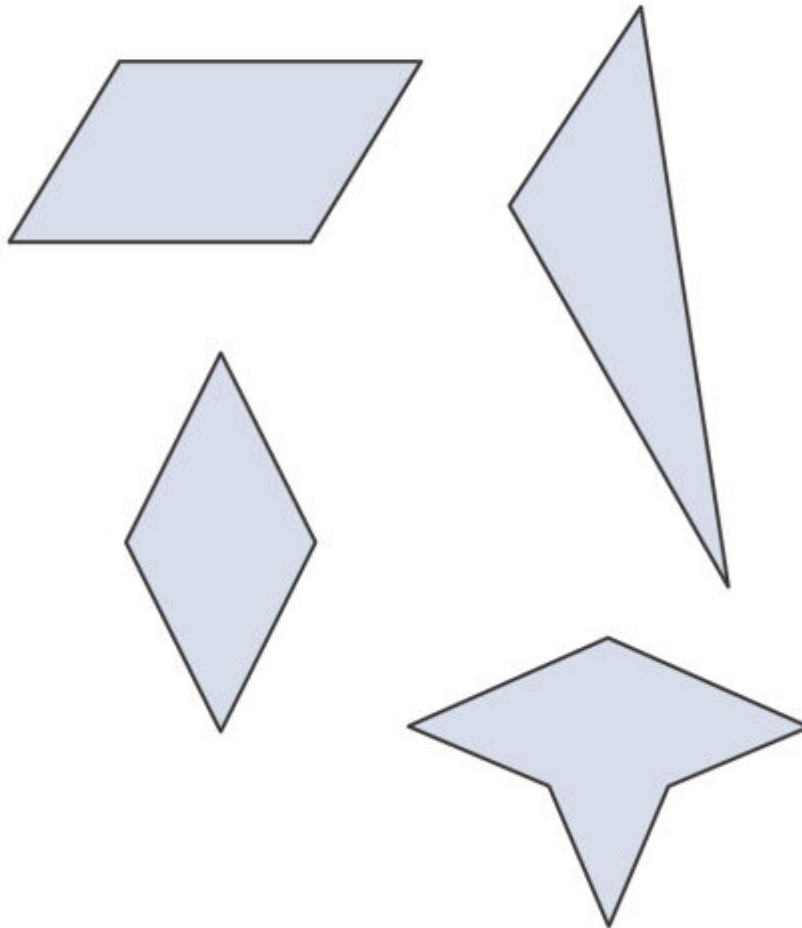


7.

13 **Two** of these shapes have **no** lines of symmetry.

Draw a cross (✕) on them.

You may use a mirror.

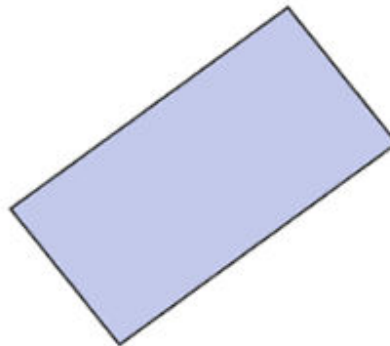

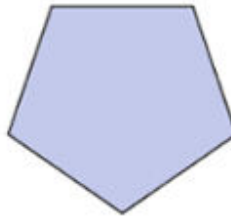
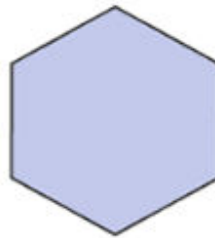



8.

6

Look at the shapes.

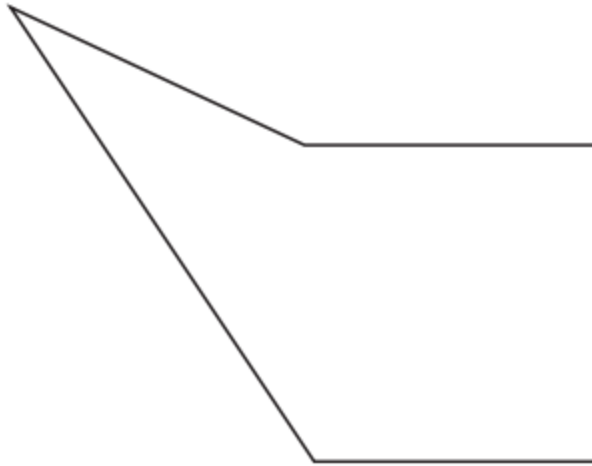
Tick (✓) the hexagon.





12

Look at this shape.



How many **right angles** does it have?

right angles



KS1 – 2016 Paper – Reasoning (Second)

10.

12

Tick the **two** sentences that are correct.

Tick **two**.

A square has sides of equal length.

☐

A square has curved sides.

☐

A square has lines of symmetry.

☐

A square has five sides.

☐

1 mark

11.

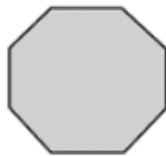
**21** Draw lines to match the shapes to their names.



pentagon



triangle



octagon

hexagon




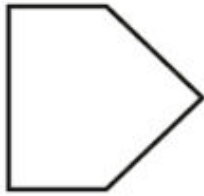
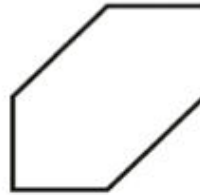
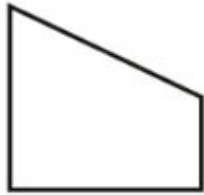
1 mark

KS1 – 2017 Paper – Reasoning

12.

22

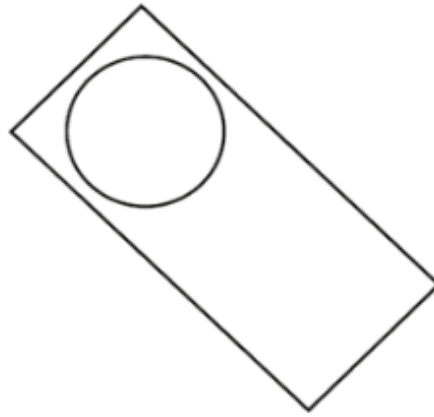
Tick the **pentagon**.



1 mark

KS1 – 2018 Paper – Reasoning

13.



Tick the names of the **two** shapes in this picture.

Tick **two**.

triangle

☐

square

☐

rectangle

☐

circle

☐


hexagon

☐

**6**

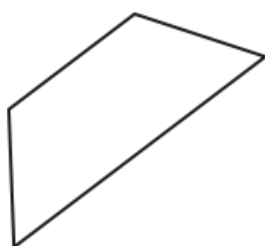
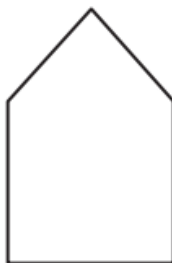
Match each shape to the correct description.

One is done for you.

shape		description
triangle		has 8 vertices
square		has 3 sides
octagon		has 4 right angles
circle		has no vertices

  
1 mark

- 11 Tick the **two** shapes that have the same number of sides.



1 mark