

Charts - Questions

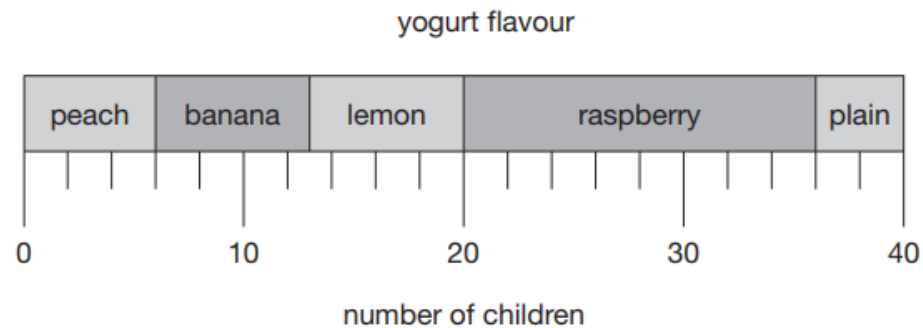
Key Stage 2: 2008 Paper B

1.

15

40 children each chose their favourite flavour of yogurt.

This chart shows the results.



How many children chose **lemon** yogurt?



15a

1 mark

How many more children chose **raspberry** than **plain** yogurt?



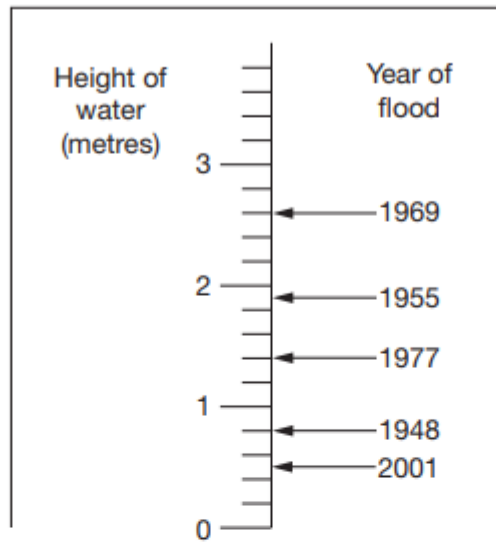
15b

1 mark

2.

17

This scale shows the dates of floods and the height of the water in the floods.



How high was the water in the 1955 flood?



17a

1 mark

How much higher was the water in the 1969 flood than in the 1948 flood?



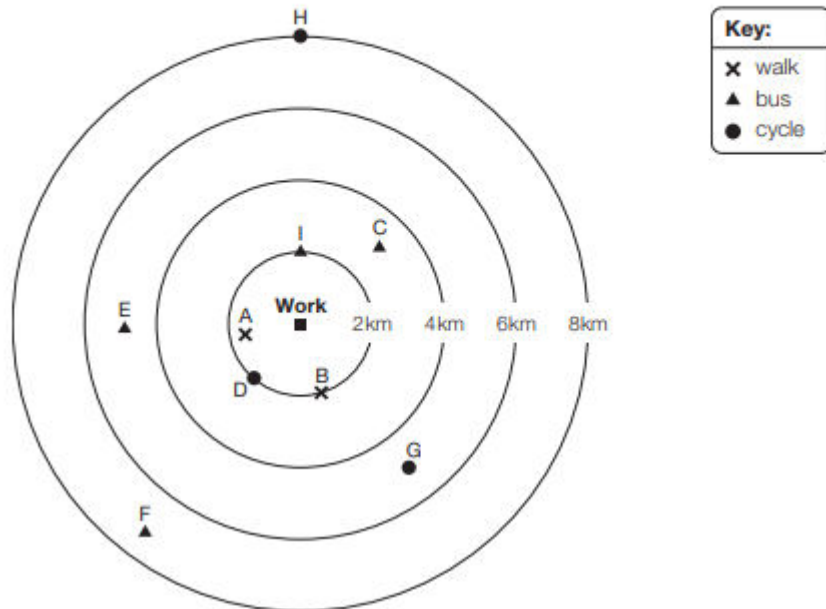
17b

1 mark

1.

6

This diagram shows how nine people travel to work and how far away they live.



How many people live **more** than 4km from work?



people

6a

1 mark

How far from work does person **G** live?



km

6b

1 mark

Write the letter of the person who lives 2km from work and cycles.



6c

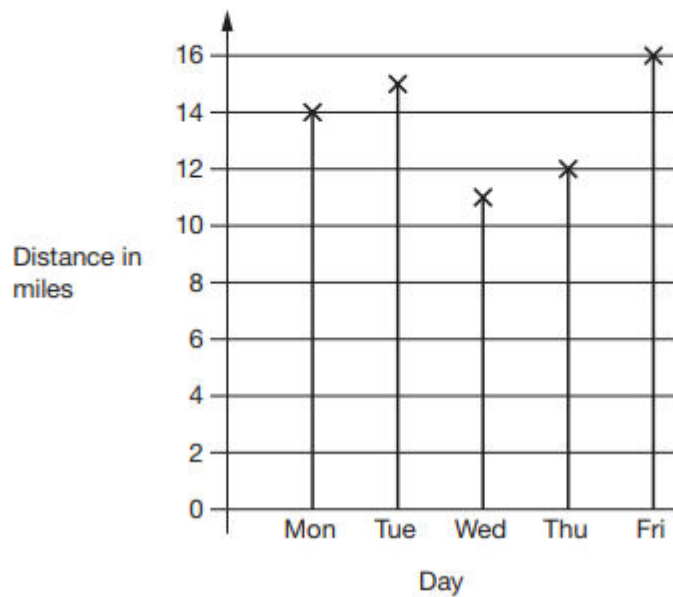
1 mark

1.

6

Amy went on a cycling holiday.

This chart shows how far she cycled each day.



How much **further** did Amy cycle on Friday than on Wednesday?



miles

6a

1 mark

How far did Amy cycle **altogether** on the three days she cycled the most?



miles

6b

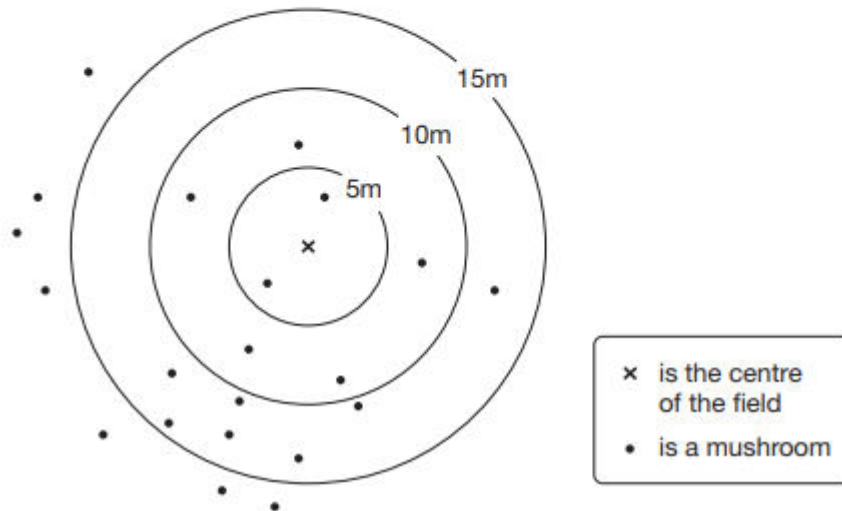
1 mark

2.

11

Class 6 did a survey of mushrooms growing in a field.

The diagram shows the distances of mushrooms from the centre of the field.



How many mushrooms were more than 10 metres from the centre?



11a

1 mark

What **fraction** of the mushrooms were less than 10 metres from the centre?



11b

1 mark